









Date:

L.0) I can find related calculations



Draw it	Multiply it	Divide it	Add it
	$2 \times 3 = 6$ $3 \times 2 = 6$	$6 \div 3 = 2$ $6 \div 2 = 3$	$2 + 2 + 2 = 6$ $3 + 3 = 6$
			
			
			
			
			

Extension: Draw some arrays of your own and see what facts you can find!



Date:

L.0) I can find related calculations

Draw it	Multiply it	Divide it	Add it
	$2 \times 3 = 6$ $3 \times 2 = 6$		$2 + 2 + 2 = 6$ $3 + 3 = 6$
	<hr/> <hr/>	$6 \div 3 = 2$ <hr/>	<hr/> <hr/>
	$3 \times 3 = 9$ <hr/>	<hr/> <hr/>	<hr/> <hr/>
	<hr/> <hr/>	<hr/> <hr/>	<hr/> <hr/>
	<hr/> <hr/>	<hr/> <hr/>	$5 + 5 + 5 + 5 = 20$ <hr/>
	<hr/> <hr/>	<hr/> <hr/>	<hr/> <hr/>

Extension: Draw some arrays of your own and see what facts you can find!



Date:

L.O) I can find related calculations

Multiply it	Divide it	Multiply by 1000	Divide by 100
$7 \times 8 = 56$ $8 \times 7 = 56$	$56 \div 8 = 7$ $56 \div 7 = 8$	$7 \times 8000 = 56000$ $8 \times 7000 = 56000$	$5600 \div 7 = 800$ $5600 \div 8 = 700$
$9 \times 6 =$ _____ $9 \times 6 =$ _____	_____ _____	_____ _____	_____ _____
$4 \times 8 =$ _____ $4 \times 8 =$ _____	_____ _____	_____ _____	_____ _____
$6 \times 12 =$ _____ $6 \times 12 =$ _____	_____ _____	_____ _____	_____ _____
$7 \times 9 =$ _____ $7 \times 9 =$ _____	_____ _____	_____ _____	_____ _____
$11 \times 8 =$ _____ $11 \times 8 =$ _____	_____ _____	_____ _____	_____ _____

Extension: Write some multiplications of your own and see what other facts you can find!