

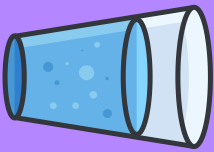

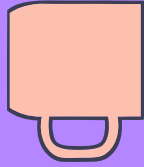


# L.O) I can add lengths



Find these objects in your house and write their total length. Round each object's length to the nearest cm to make it easier.



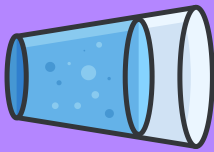




Draw and calculate a combination of your own!

# L.O) I can add lengths



Find these objects in your house and write their total length. Round each object's length to the nearest cm to make it easier.


  
cm  
mm  
cm  
mm  
cm  
mm  
cm  
mm  
cm  
mm  
cm  
mm  
cm  
mm

Draw and calculate a combination of your own!

# L.O) I can add lengths




Find these objects in your house and write their total length. Be precise, I want to see you using decimals!




cm

mm



cm

mm




cm

mm



cm

mm



cm

mm



cm

mm



cm

mm

Draw and calculate a combination of your own!